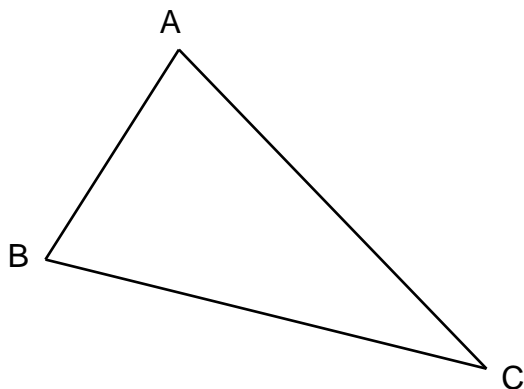




NUME : .....

PRENUME : .....

**1** Masoara lungimea laturii BC.




Răspuns : .....

A CA+ CA- NA R

**2** Încercuie te raspunsul corect.


Lungimea casei este :

- ▶ 15 kilograme
- ▶ 15 metri
- ▶ 15 litri




Sticla con.tine :

- ▶ 1 kilometru
- ▶ 1 litru
- ▶ 1 ora




Greutatea vacii este :

- ▶ 800 metri
- ▶ 800 ore
- ▶ 800 kilograme




Ceasul arata :

- ▶ 10 litri
- ▶ 10 euro
- ▶ ora 10



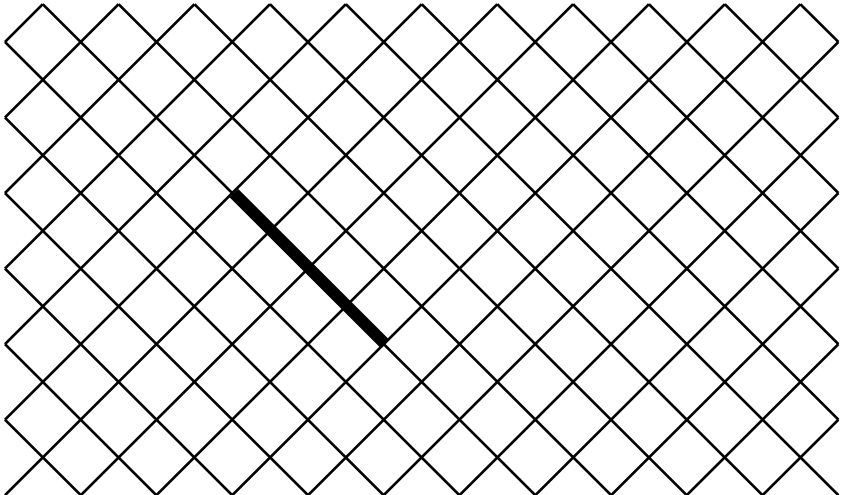
A CA+ CA- NA R

**3** Deseneaza, plecând de la punct, o linie lunga de 7 cm.



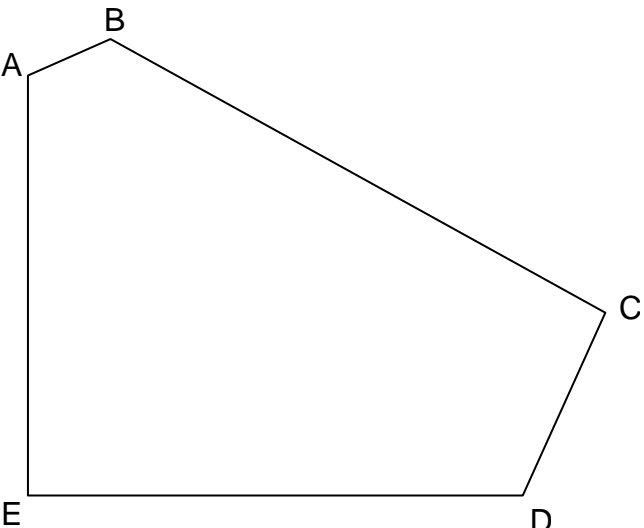
A CA+ CA- NA R

**4** Deseneaza un patrat pornind de la latura desenata.



A CA+ CA- NA R

**5** Observa figura de mai jos i completeaza.




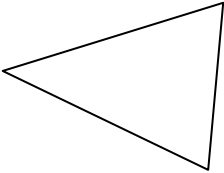
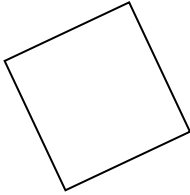
Câte laturi are aceasta figura ?  
 Răspuns : .....

Câte vârfuri are aceasta figura ?  
 Răspuns : .....

Câte unghiuri drepte are aceasta figura ?  
 Răspuns : .....

A CA+ CA- NA R

**6 Încercuie te numele fiecărei figuri.**

  ► <i>cerc</i> ► <i>patrat</i> ► <i>dreptunghi</i> ► <i>triunghi</i>	  ► <i>cub</i> ► <i>triunghi</i> ► <i>dreptunghi</i> ► <i>cerc</i>	  ► <i>dreptunghi</i> ► <i>cerc</i> ► <i>patrat</i> ► <i>triunghi</i>
---	--	---

A	CA+	CA-	NA	R
---	-----	-----	----	---

**7 Pune în ordine numerele de la cel mai mic la cel mai mare :**

152	2	14	7	125	41	20
-----	---	----	---	-----	----	----

--	--	--	--	--	--	--

A	CA+	CA-	NA	R
---	-----	-----	----	---

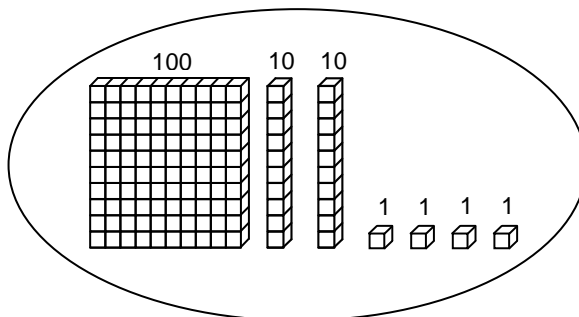
**8 Completeaza seria de numere :**

150	140	130	.....	.....	.....	.....	.....	.....	.....	50
-----	-----	-----	-------	-------	-------	-------	-------	-------	-------	----

A	CA+	CA-	NA	R
---	-----	-----	----	---

**9 Uita-te la exemplul de mai jos i încercuie te numarul corect.**

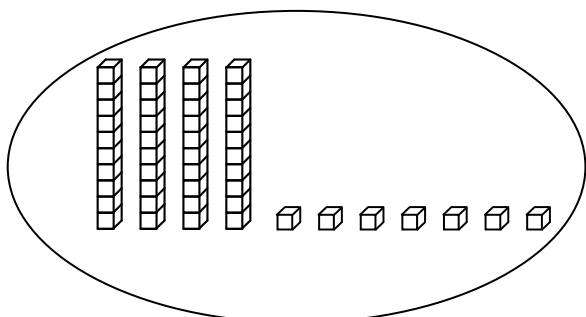
Esempio :



421

124

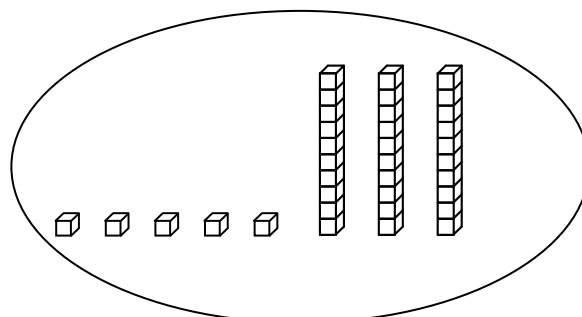
241



84

74

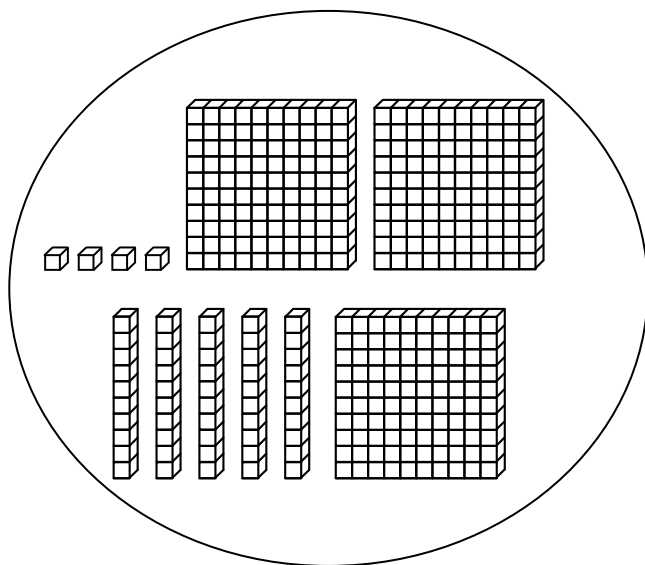
47



35

53

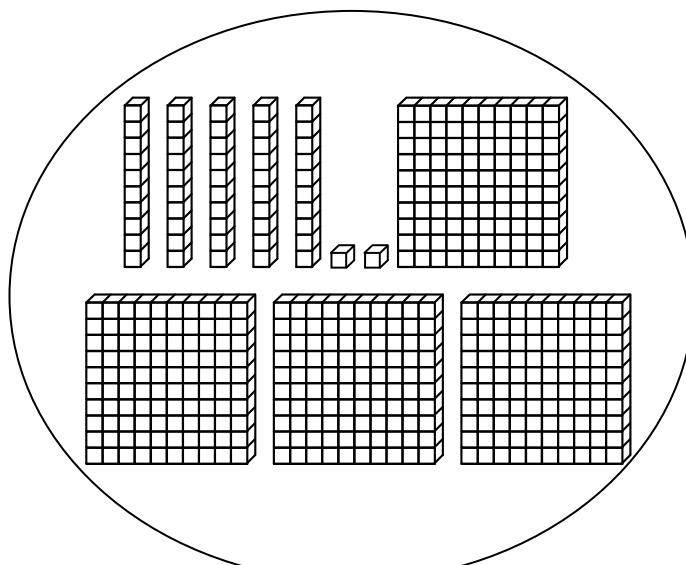
23



354

345

454



542

452

245

A CA+ CA- NA R

## 10 Calculeaza.

$$\begin{array}{r} 48 \\ + 31 \\ \hline \end{array}$$

$$\begin{array}{r} 166 \\ + 254 \\ \hline \end{array}$$

A CA+ CA- NA R

## 11 Calculeaza.

$$\begin{array}{r} 87 \\ - 52 \\ \hline \end{array}$$

$$\begin{array}{r} 512 \\ - 139 \\ \hline \end{array}$$

A CA+ CA- NA R

## 12 Calculeaza.

$$\begin{array}{r} 32 \\ \times 4 \\ \hline \end{array}$$

$$\begin{array}{r} 75 \\ \times 3 \\ \hline \end{array}$$

A CA+ CA- NA R

**13 Cite te i rezolva aceasta problema :**

a ) În clasa sunt 26 de elevi. Profesoara distribuie patru car i la fiecare.

Câte car i au fost distribuite ?

↳ Răspuns : .....

b ) Se distribuiesc 32 de car i la 4 jucatori. Câte car i are fiecare jucator ?

↳ Răspuns : .....

A CA+ CA- NA R

**14 Citete problema i încercuie te raspunsul corect :**

a ) Andrei are 14 bile ro i 16 bile albastre.

Câte bile are în total ?

▶  $16 - 14$

▶  $14 + 14$

▶  $16 + 14$

▶  $16 + 16$

b ) În clasa sunt 29 elevi. 15 sunt baieti.

Câte fete sunt în clasa ?

▶  $29 + 15$

▶  $15 + 29$

▶  $29 - 15$

▶  $29 \times 15$

A CA+ CA- NA R